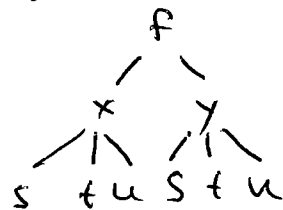


1(a) Let $f(x, y) = e^{xy}$. Evaluate $\frac{\partial f}{\partial t}$ at $(s, t, u) = (-1, 3, 5)$ where $x = st$ and $y = u - t$. State carefully the version of the Chain Rule that you use.

$$\frac{\partial f}{\partial t} = \frac{\partial f}{\partial x} \frac{\partial x}{\partial t} + \frac{\partial f}{\partial y} \frac{\partial y}{\partial t}$$



$$\frac{\partial f}{\partial x} = ye^{xy} \quad \frac{\partial x}{\partial t} = s$$

$$\text{At } (s, t, u) = (-1, 3, 5)$$

$$(x, y) = (-3, 2)$$

$$\frac{\partial f}{\partial y} = xe^{xy} \quad \frac{\partial y}{\partial t} = -1$$

$$\text{So } \frac{\partial f}{\partial x} = 2e^{-6}, \quad \frac{\partial f}{\partial y} = -3e^{-6}, \quad \frac{\partial x}{\partial t} = -1, \quad \frac{\partial y}{\partial t} = -1$$

$$\text{So } \frac{\partial f}{\partial t} = 2e^{-6}(-1) + (-3e^{-6})(-1) = \boxed{e^{-6}}$$

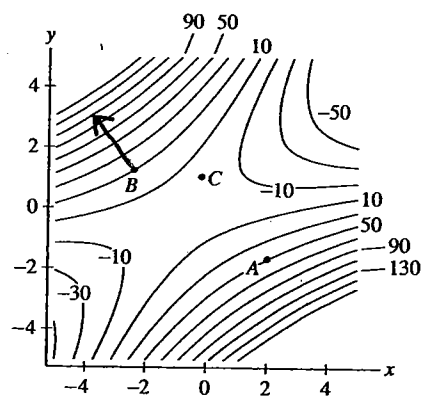
1(b) The figure shows a contour map of $f(x, y)$.

(i) Estimate f_x and f_y at point A.

(ii) At point B, in which direction does f increase most rapidly?

(iii) At which of A, B, or C is f_y smallest?

(iv) At A, is f_{yx} positive, negative, or zero? Explain briefly.



(i) $f_x(A) \approx 20, \quad f_y \approx -40$

(ii) in direction indicated by arrow

(iii) f_y smallest at \boxed{A} (positive at B, near 0 at C)

(iv) moving in x-direction, contour spacing gets closer \rightarrow steeper. So f_y decreases (since it's negative).

So $\boxed{f_{yx} \text{ is negative}}$.

2. Let $f(x, y) = \frac{x^2}{y^2 + 1}$. Use linear approximation (or a tangent plane) at an appropriate point (a, b) to estimate $f(4.01, 0.98)$.

- What is the appropriate point (a, b) ?
- What is the linear approximation or tangent plane (your choice)?
- Estimate $f(4.01, 0.98)$.

$$\text{Use } (a, b) = \boxed{(4, 1)},$$

$$f_x(x, y) = \frac{2x}{y^2 + 1}, \quad f_x(4, 1) = 4$$

$$f_y(x, y) = \frac{-x^2}{y^2 + 1} \cdot 2y, \quad f_y(4, 1) = -8$$

$$L(x, y) = f(4, 1) + f_x(4, 1)(x - 4) + f_y(4, 1)(y - 1)$$

$$\boxed{L(x, y) = 8 + 4(x - 4) - 8(y - 1)}$$

now,

$$f(4.01, 0.98) \approx L(4.01, 0.98)$$
$$= 8 + 4(0.01) - 8(-0.02)$$

$$= 8 + .04 + .16$$

$$= \boxed{8.20}$$

3. Find the critical points of the function $f(x, y) = (x^2 + y^2)e^{-x}$. Then analyze them using the Second Derivatives Test. What can you conclude about the behavior of f at these points?

$$\begin{aligned} f_x(x, y) &= 2xe^{-x} - (x^2 + y^2)e^{-x} \\ &= e^{-x}(2x - x^2 - y^2) = 0 \Rightarrow 2x - x^2 - y^2 = 0. \end{aligned}$$

$$f_y(x, y) = 2ye^{-x} = 0 \Rightarrow \underline{y = 0}.$$

put into first eqn: $2x - x^2 = 0$

$$x(2 - x) = 0$$

$$\underline{x = 0} \text{ or } \underline{x = 2}$$

Critical Points: $(0, 0), (2, 0)$

$$f_{xx}(x, y) = e^{-x}(2 - 2x) - e^{-x}(2x - x^2 - y^2)$$

$$\underline{f_{xx}(0, 0) = 2}, \quad \underline{f_{xx}(2, 0) = -2e^{-2}}$$

$$f_{yy}(x, y) = 2e^{-x}$$

$$\underline{f_{yy}(0, 0) = 2}, \quad \underline{f_{yy}(2, 0) = 2e^{-2}}$$

$$f_{yx}(x, y) = -2ye^{-x}$$

$$\underline{f_{yx}(0, 0) = 0}, \quad \underline{f_{yx}(2, 0) = 0}$$

$$D(0, 0) = 4, \quad f_{xx}(0, 0) > 0, \quad \text{so } \boxed{\text{local min. at } (0, 0)}$$

$$D(2, 0) = -4e^{-2} < 0, \quad \text{so } \boxed{\text{saddle point at } (2, 0)}$$

$$(D = f_{xx}f_{yy} - (f_{yx})^2)$$

4(a) Find the maximum rate of change of $f(x, y) = x^2y + \sqrt{y}$ at the point $(2, 1)$. In which direction does it occur?

max. rate of change is $|\nabla f|$.

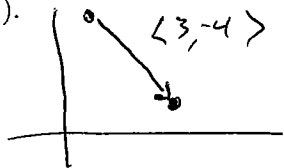
$$\left. \begin{aligned} f_x(x, y) &= 2xy, & f_x(2, 1) &= 4 \\ f_y(x, y) &= x^2 + \frac{1}{2\sqrt{y}}, & f_y(2, 1) &= \frac{9}{2} \end{aligned} \right\} \nabla f(2, 1) = \langle 4, \frac{9}{2} \rangle$$

$$|\nabla f| = \sqrt{16 + \frac{81}{4}} = \boxed{\frac{\sqrt{45}}{2}}$$

direction = direction of gradient = $\boxed{\langle 4, \frac{9}{2} \rangle}$

(or $\frac{2}{\sqrt{45}} \langle 4, \frac{9}{2} \rangle$, a unit vector)

(b) Find the directional derivative of $g(x, y) = 2\sqrt{x} - y^2$ at the point $(1, 5)$ in the direction toward the point $(4, 1)$.



$$\vec{u} = \frac{\langle 3, -4 \rangle}{|\langle 3, -4 \rangle|} = \underline{\underline{\langle \frac{3}{5}, -\frac{4}{5} \rangle}}$$

$$\nabla g(x, y) = \langle \frac{1}{\sqrt{x}}, -2y \rangle$$

$$\nabla g(1, 5) = \langle 1, -10 \rangle$$

$$D_{\vec{u}} g(1, 5) = \langle 1, -10 \rangle \cdot \langle \frac{3}{5}, -\frac{4}{5} \rangle$$

$$= \frac{3}{5} + \frac{40}{5} = \boxed{\frac{43}{5}}$$

(c) Find du if $u = \ln(1 + se^{2t})$.

$$du = \frac{\partial u}{\partial s} ds + \frac{\partial u}{\partial t} dt$$

$$du = \frac{1}{1+se^{2t}} (e^{2t}) ds + \frac{1}{1+se^{2t}} (2se^{2t}) dt$$